

© International Baccalaureate Organization 2024

All rights reserved. No part of this product may be reproduced in any form or by any electronic or mechanical means, including information storage and retrieval systems, without the prior written permission from the IB. Additionally, the license tied with this product prohibits use of any selected files or extracts from this product. Use by third parties, including but not limited to publishers, private teachers, tutoring or study services, preparatory schools, vendors operating curriculum mapping services or teacher resource digital platforms and app developers, whether fee-covered or not, is prohibited and is a criminal offense.

More information on how to request written permission in the form of a license can be obtained from <https://ibo.org/become-an-ib-school/ib-publishing/licensing/applying-for-a-license/>.

© Organisation du Baccalauréat International 2024

Tous droits réservés. Aucune partie de ce produit ne peut être reproduite sous quelque forme ni par quelque moyen que ce soit, électronique ou mécanique, y compris des systèmes de stockage et de récupération d'informations, sans l'autorisation écrite préalable de l'IB. De plus, la licence associée à ce produit interdit toute utilisation de tout fichier ou extrait sélectionné dans ce produit. L'utilisation par des tiers, y compris, sans toutefois s'y limiter, des éditeurs, des professeurs particuliers, des services de tutorat ou d'aide aux études, des établissements de préparation à l'enseignement supérieur, des fournisseurs de services de planification des programmes d'études, des gestionnaires de plateformes pédagogiques en ligne, et des développeurs d'applications, moyennant paiement ou non, est interdite et constitue une infraction pénale.

Pour plus d'informations sur la procédure à suivre pour obtenir une autorisation écrite sous la forme d'une licence, rendez-vous à l'adresse <https://ibo.org/become-an-ib-school/ib-publishing/licensing/applying-for-a-license/>.

© Organización del Bachillerato Internacional, 2024

Todos los derechos reservados. No se podrá reproducir ninguna parte de este producto de ninguna forma ni por ningún medio electrónico o mecánico, incluidos los sistemas de almacenamiento y recuperación de información, sin la previa autorización por escrito del IB. Además, la licencia vinculada a este producto prohíbe el uso de todo archivo o fragmento seleccionado de este producto. El uso por parte de terceros —lo que incluye, a título enunciativo, editoriales, profesores particulares, servicios de apoyo académico o ayuda para el estudio, colegios preparatorios, desarrolladores de aplicaciones y entidades que presten servicios de planificación curricular u ofrezcan recursos para docentes mediante plataformas digitales—, ya sea incluido en tasas o no, está prohibido y constituye un delito.

En este enlace encontrará más información sobre cómo solicitar una autorización por escrito en forma de licencia: <https://ibo.org/become-an-ib-school/ib-publishing/licensing/applying-for-a-license/>.

Environmental systems and societies
Standard level
Paper 2

6 May 2024

Zone A morning | **Zone B** morning | **Zone C** morning

Candidate session number

2 hours

--	--	--	--	--	--	--	--	--	--

Instructions to candidates

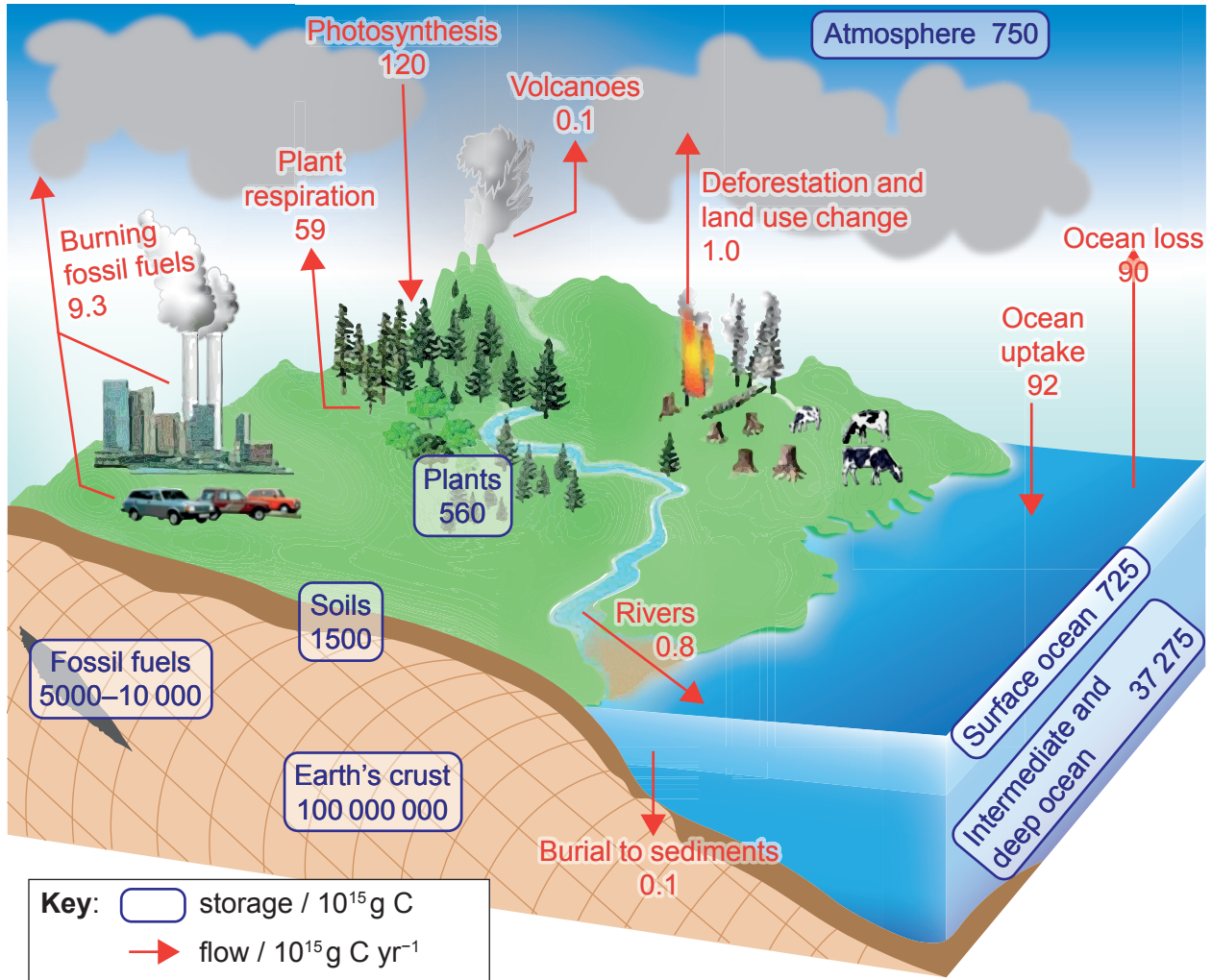
- Write your session number in the boxes above.
- Do not open this examination paper until instructed to do so.
- Section A: answer all questions.
- Section B: answer two questions.
- Answers must be written within the answer boxes provided.
- A calculator is required for this paper.
- The maximum mark for this examination paper is **[65 marks]**.



Section A

Answer **all** questions. Answers must be written within the answer boxes provided.

Figure 1: Carbon cycle



1. (a) Identify **one** inorganic carbon storage in **Figure 1**. [1]

.....

.....

(This question continues on the following page)



(Question 1 continued)

- (b) Draw a labelled diagram to illustrate the flows of carbon between plants and the atmosphere shown in **Figure 1**. [2]

- (c) Using the data in **Figure 1**, calculate the net gain in carbon in the oceans in 10^{15} g. [1]

.....

.....

- (d) Describe **one** advantage and **one** disadvantage of the oceans as a carbon sink. [2]

Advantage:

.....

.....

Disadvantage:

.....

.....

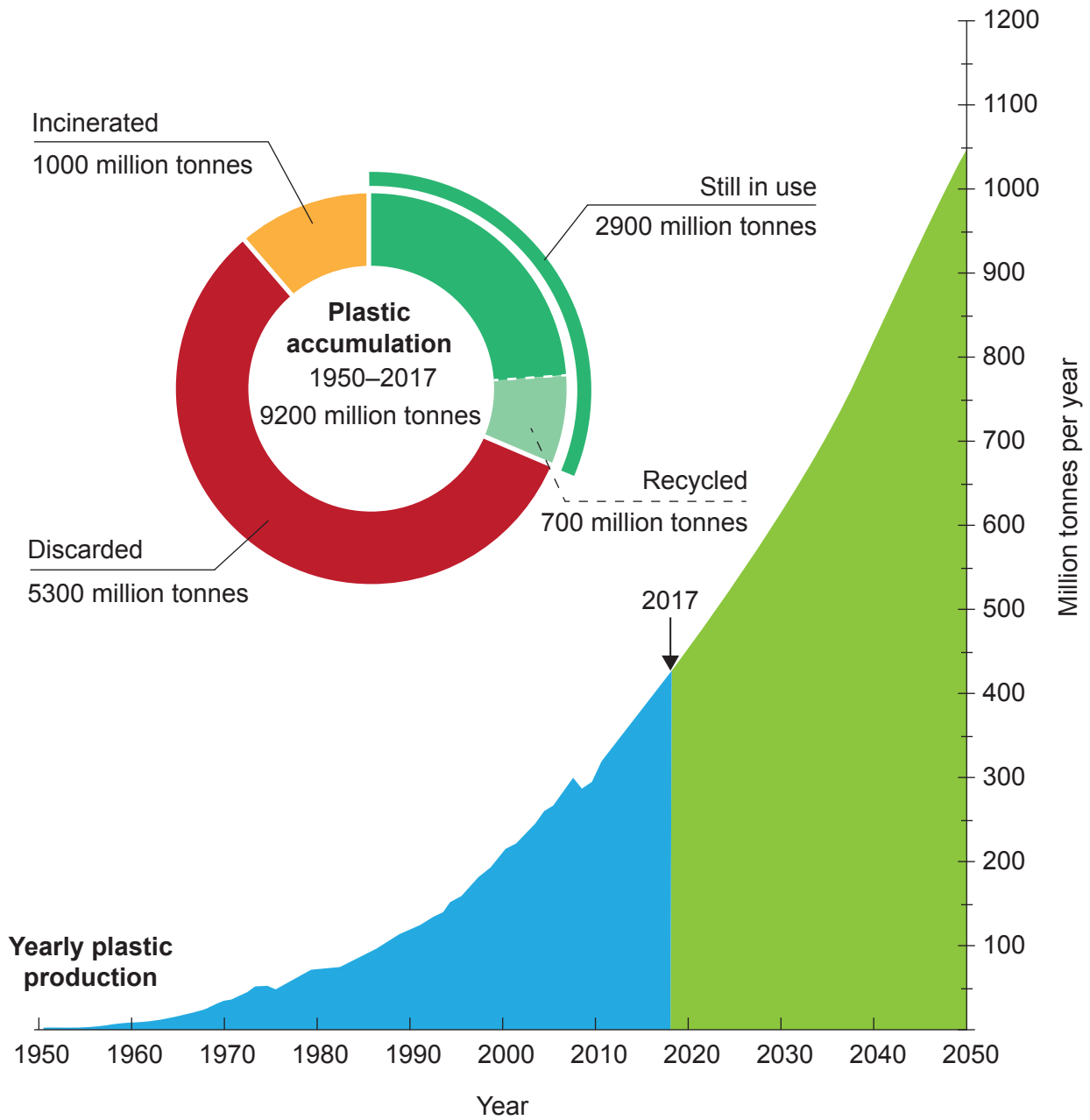
- (e) Outline **one** method to mitigate the effects of atmospheric carbon storage. [1]

.....

.....



Figure 2: Global plastic production, accumulation and future trends



2. (a) Using **Figure 2**, estimate the mass of plastic that was produced in 2017. [1]

.....

.....

(This question continues on the following page)



(Question 2 continued)

(b) Calculate the mean yearly production of plastic between 1950 and 2017. [1]

.....
.....

(c) Outline why the total accumulated plastic in 2017 is greater than the yearly production. [1]

.....
.....

(d) Describe how the environmental impacts of discarded and incinerated plastic waste would differ. [2]

.....
.....
.....
.....

(e) Describe **two** possible reasons for the future trends of plastic production, as shown in **Figure 2**. [2]

.....
.....
.....
.....

(f) Explain **two** potential impacts of the future trends of plastic production on the global ecological footprint. [2]

.....
.....
.....
.....



Figure 3(a): Average hourly variation in ozone on wet and dry days in Guarujá, Brazil

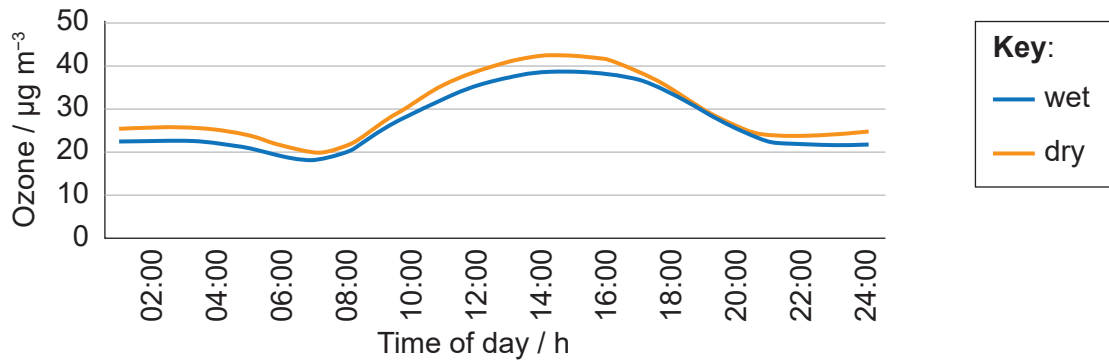


Figure 3(b): Average hourly variation in NO_x on wet and dry days in Guarujá, Brazil

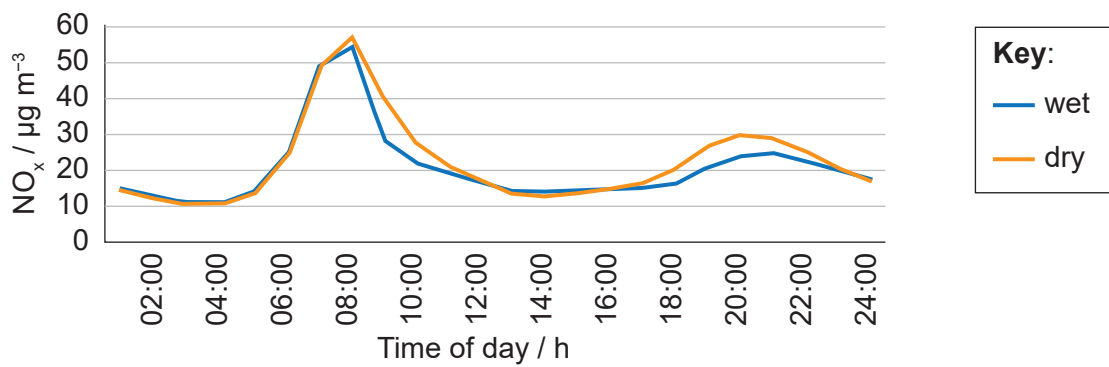
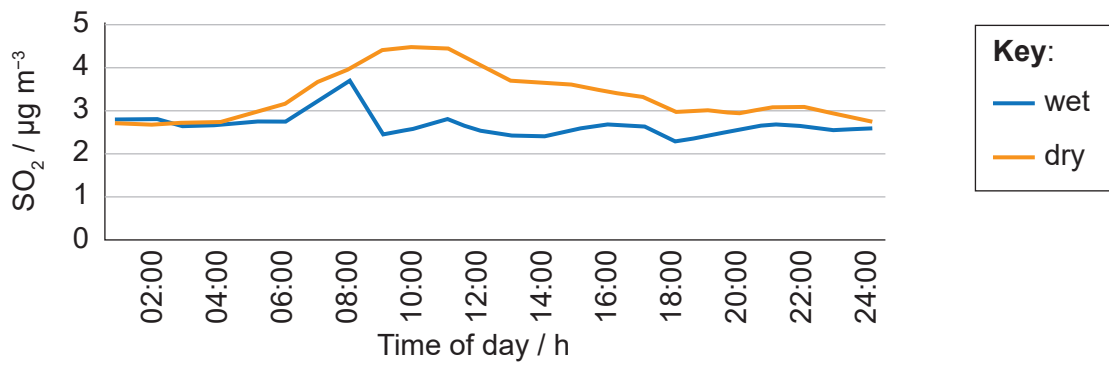


Figure 3(c): Average hourly variation in SO₂ on wet and dry days in Guarujá, Brazil



3. (a) Identify the time of day that ozone is at its lowest concentration on a wet day in Figure 3(a).

[1]

.....

.....

(This question continues on the following page)



(Question 3 continued)

(b) Outline why the highest concentration of ozone occurs at the time shown in **Figure 3(a)**. [2]

.....
.....
.....
.....

(c) Describe **one** impact on human health of high ozone concentrations in the air. [1]

.....
.....

(d) Outline **one** possible source of the pollutant shown in **Figure 3(b)**. [1]

.....
.....

(e) Outline why SO₂ levels are lower on wet days than on dry days, as shown in **Figure 3(c)**. [1]

.....
.....

(f) Evaluate a strategy to manage the effects of **one** pollutant named in **Figure 3(b)** or **Figure 3(c)**. [3]

.....
.....
.....
.....
.....
.....



Section B

Answer **two** questions. Answers must be written within the answer boxes provided.

4. (a) Outline the distinctive features of the anthropocentric environmental value system. [4]
- (b) Explain how the shape of a population growth curve for a prey species may be influenced by the presence of a predator species. [7]
- (c) To what extent would an anthropocentric approach to addressing human population growth be the most successful in maintaining a sustainable population? [9]
5. (a) Outline how **four** named factors contribute to a steady-state equilibrium in an ecosystem. [4]
- (b) Explain why pyramids of numbers, biomass and productivity may vary in shape for different food chains. [7]
- (c) To what extent can the practical strategies for obtaining data for a pyramid of numbers be made reliable? [9]
6. (a) Outline the mechanisms by which a terrestrial species may have evolved from an aquatic ancestor. [4]
- (b) Explain how the hydrological cycle influences climate around the Earth. [7]
- (c) Evaluate management strategies for reducing the impact of agricultural pollution on an aquatic ecosystem. [9]
7. (a) Outline **two** transfer processes and **two** transformation processes that occur within the soil. [4]
- (b) Explain how negative and positive feedback mechanisms play a role in the process of global warming. [7]
- (c) To what extent are the concepts of natural capital and natural income helpful in managing the sustainable use of natural resources? [9]



A large rectangular area containing 25 horizontal dotted lines for writing.



24EP09

Turn over

A large rectangular area containing horizontal dotted lines for writing.



24EP10

A large rectangular area containing 25 horizontal dotted lines for writing.



24EP11

Turn over

A large rectangular area containing horizontal dotted lines, intended for handwritten notes or answers.



A large rectangular area containing 25 horizontal dotted lines for writing.



24EP13

Turn over

A large rectangular area containing 28 horizontal dotted lines for writing.



24EP14

Blank lined area for writing, consisting of multiple horizontal dotted lines within a rectangular border.



A large rectangular area containing 25 horizontal dotted lines for writing.



24EP17

Turn over

A large rectangular area containing horizontal dotted lines for writing.



24EP18

A large rectangular area containing horizontal dotted lines for writing.



24EP20

A large rectangular area containing 25 horizontal dotted lines, intended for writing or drawing.



24EP21

Turn over

Blank lined area for writing, consisting of multiple horizontal dotted lines within a rectangular border.



24EP22

Large rectangular area with horizontal dotted lines for writing.



Disclaimer:

Content used in IB assessments is taken from authentic, third-party sources. The views expressed within them belong to their individual authors and/or publishers and do not necessarily reflect the views of the IB.

References:

Figure 1 The Globe Program, 2017. *Global Carbon Cycle Model*. [image online] Available at: <https://www.globe.gov/do-globe/measurement-campaigns/past-projects/earth-as-a-system-projects/carbon-cycle> [Accessed 13 December 2022]. Source adapted.

Figure 2 United Nations Environment Programme (2021). *From Pollution to Solution: A global assessment of marine litter and plastic pollution*. Nairobi. Page 17, Figure i: Global plastic production, accumulation and future trends.

All other texts, graphics and illustrations © International Baccalaureate Organization 2024



24EP24